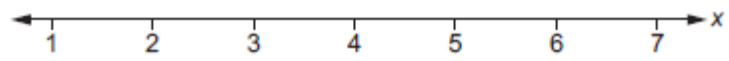


**GCSE (9-1) Mathematics**  
**J560/06** Paper 6 (Higher Tier)

**Question Set 6**

1

Solve  $3x + 4 < 19$ .  
Show your solution on the number line.



[4]

2

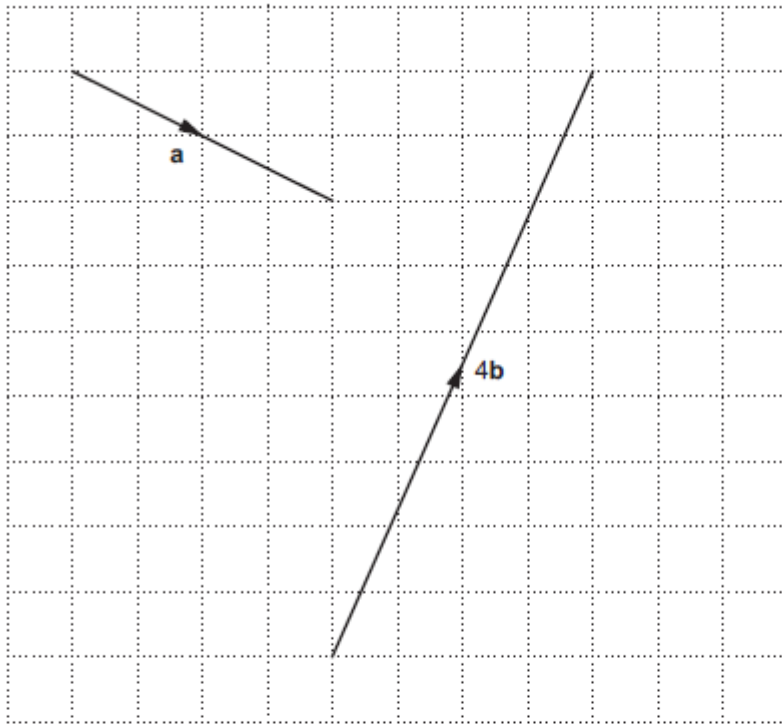
A truck is used to transport some wood panels.  
Each wood panel is a cuboid measuring 2.4 m by 1.2 m by 1.8 cm.  
The density of each wood panel is  $750 \text{ kg/m}^3$ .

The truck can carry 15 tonnes of these wood panels.

Calculate the maximum number of wood panels that the truck can carry.  
Show how you decide.

..... [6]

- 3 (a) Vectors  $\mathbf{a}$  and  $4\mathbf{b}$  are drawn on the grid.



- (a) Write vector  $\mathbf{a}$  as a column vector.

(a)  $\begin{pmatrix} \phantom{0} \\ \phantom{0} \end{pmatrix}$  [2]

- 3 (b) (b) Find vector  $\mathbf{b}$  as a column vector.

(b)  $\begin{pmatrix} \phantom{0} \\ \phantom{0} \end{pmatrix}$  [2]

4

Li has  $t$  toy bricks.  
She only has red bricks and blue bricks.

Li picks two bricks, one after the other.

If the first brick she picks is red, the probability that the second brick is red is  $\frac{2}{3}$ .

If the first brick she picks is blue, the probability that the second brick is red is  $\frac{7}{10}$ .

Calculate the value of  $t$ .

$t = \dots\dots\dots$  [4]

5

$x$  is directly proportional to  $y$ .  
 $y$  is directly proportional to  $z$ .

When  $x = 10$ ,  $y = 60$ .

When  $y = 8$ ,  $z = 1.6$ .

Find a formula for  $z$  in terms of  $x$ .

..... [4]

6

Paintings are sold in an art gallery.

The cost of a painting has  $k\%$  commission added to it.

Tax of 15% is then added to the total cost to give the price to pay.

Layla correctly calculates the price to pay by multiplying the cost of the painting by 1.403.

Work out the value of  $k$ .

$k = \dots\dots\dots$  [3]

7

Students are asked to choose one subject from Option A and one subject from Option B.

Option A
Economics
Geography
History
Media Studies

Option B
Art
Drama
Engineering
German
Graphics
Music
PE

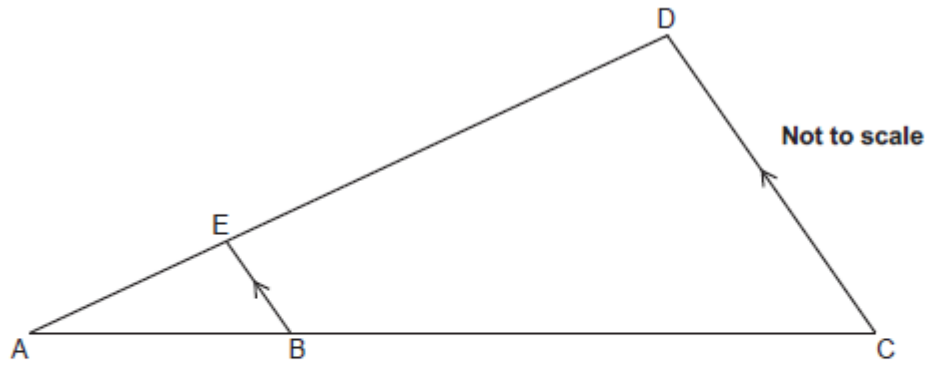
If a student chooses their subjects at random, what is the probability that both subjects have the same first letter?

..... [3]



8

In the diagram, AED and ABC are straight lines and BE is parallel to CD.



The ratio of length AB to length BC is 2 : 3.

Triangle ABE has an area of  $8\text{cm}^2$ .

Work out the area of triangle ACD.

.....  $\text{cm}^2$  [4]

9

A bus company has a large number of buses.  
25% of the buses are more than 10 years old.

If a bus is more than 10 years old, the probability that it will start first time is 0.3.  
If a bus is less than 10 years old, the probability that it will start first time is 0.65.

Amir is asked to drive one of the company's buses, chosen at random.

Calculate the probability that the bus starts first time.

..... [4]

10 (a) Here is a sequence.

$$3 \quad 3\sqrt{5} \quad 15 \quad 15\sqrt{5}$$

(a) Work out the next term.

(a) ..... [1]

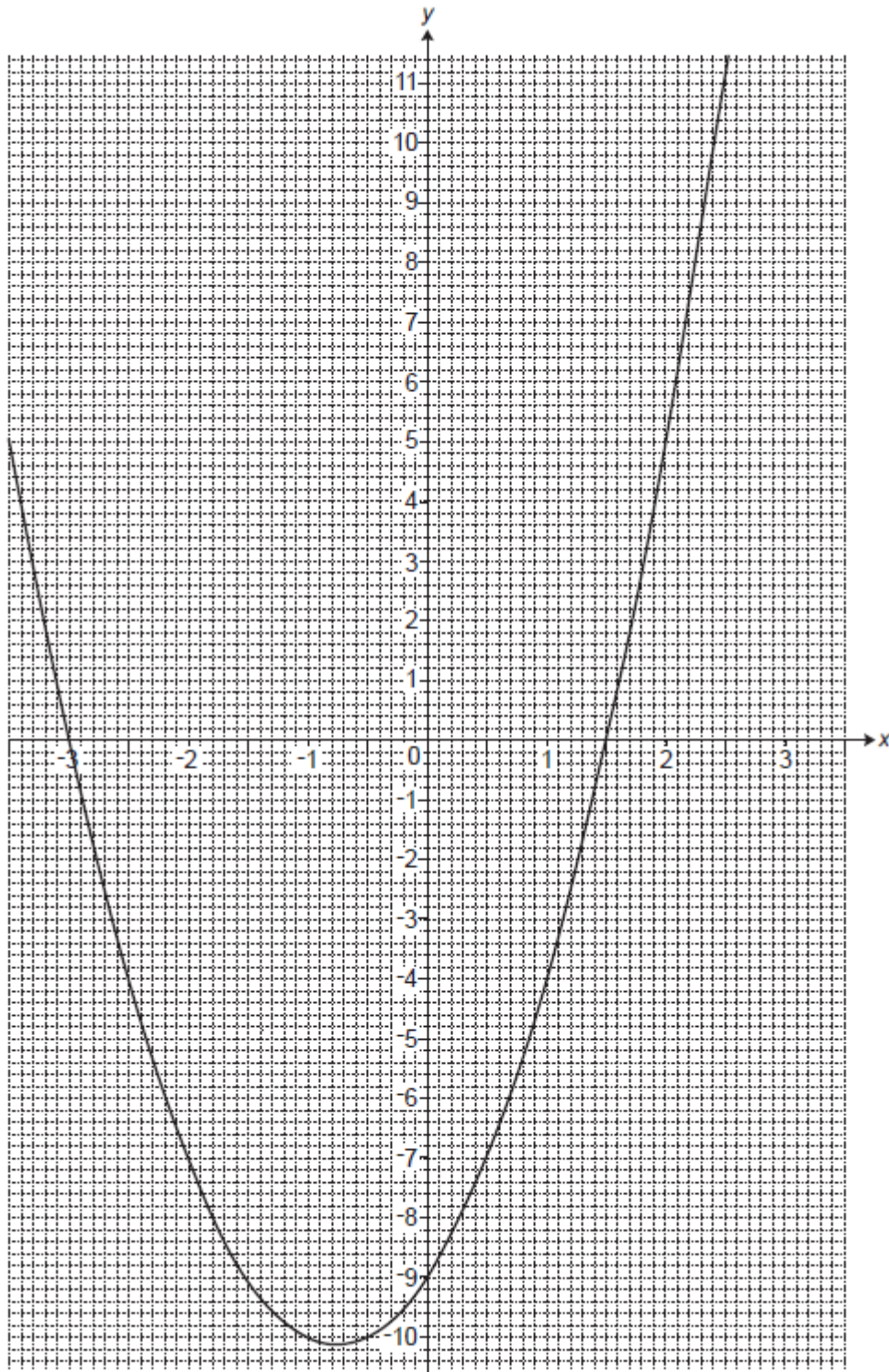
10 (b) (b) Find the  $n$ th term.

(b) ..... [3]

11 Write  $0.4\dot{1}\dot{6}$  as a fraction in its simplest form.  
You must **show full working** in support of your answer.

..... [3]

12 (a) The graph of  $y = 2x^2 + 3x - 9$  is drawn below.



(a) Use the graph to solve  $2x^2 + 3x - 9 = 0$ .

(a)  $x = \dots\dots\dots$  or  $x = \dots\dots\dots$  [2]

- 12 (b) (b) The equation  $2x^2 + x - 4 = 0$  can be solved by finding the intersection of the graph of  $y = 2x^2 + 3x - 9$  and the line  $y = ax + b$ .
- (i) Find the value of  $a$  and the value of  $b$ .

(b)(i)  $a = \dots\dots\dots$   
 $b = \dots\dots\dots$  [2]

- 12 (b) (ii) Hence **use the graph** to solve the equation  $2x^2 + x - 4 = 0$ .

(ii)  $x = \dots\dots\dots$  or  $x = \dots\dots\dots$  [3]

**Total Marks for Question Set 6: 50**

---

# OCR

Oxford Cambridge and RSA

## **Copyright Information**

OCR is committed to seeking permission to reproduce all third-party content that it uses in its assessment materials. OCR has attempted to identify and contact all copyright holders whose work is used in this paper. To avoid the issue of disclosure of answer-related information to candidates, all copyright acknowledgements are reproduced in the OCR Copyright Acknowledgements Booklet. This is produced for each series of examinations and is freely available to download from our public website ([www.ocr.org.uk](http://www.ocr.org.uk)) after the live examination series.

If OCR has unwittingly failed to correctly acknowledge or clear any third-party content in this assessment material, OCR will be happy to correct its mistake at the earliest possible opportunity.

For queries or further information please contact The OCR Copyright Team, The Triangle Building, Shaftesbury Road, Cambridge CB2 8EA.

OCR is part of the Cambridge Assessment Group; Cambridge Assessment is the brand name of University of Cambridge Local Examinations Syndicate (UCLES), which is itself a department of the University of Cambridge